

















puzzle 1

Which option is correct ?

www.mathinenglish.com

				11
				5
				17
				7
7	9	12	12	

(A) $\text{circle} = 2$ / $\text{square with diagonal lines} = 4$

(B) $\text{square with diagonal lines} = 5$ / $\text{star} = 1$

(C) $\text{star} = 0$ / $\text{circle} = 2$

puzzle 2

Which number completes this pattern ?



www.mathinenglish.com

puzzle 3

Which number completes this puzzle sequence ?



www.mathinenglish.com

puzzle 4

Which number should replace the question mark ?

2	5	6
5	1	?
2	5	6
5	1	2

www.mathinenglish.com

Answer to brain teasers

puzzle 1 : C
Fill in to check.

puzzle 2 : 33
The pattern is plus 3, plus 6.

puzzle 3 : 6
Add the left and right numbers and divide by 3.

puzzle 4 : 2
The 2nd row is 2 times the 1st row. The 4th row is 2 times the 3rd row.