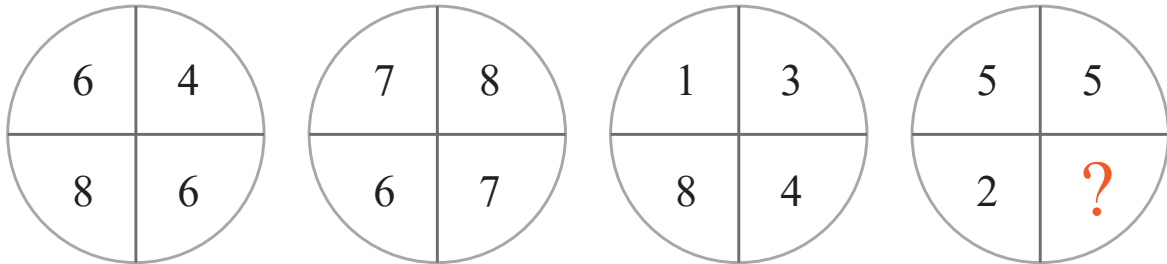


puzzle 1

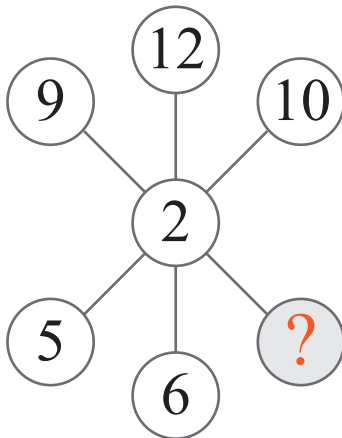
Which number completes the number pattern ?



www.mathinenglish.com

puzzle 2


What is the missing number in this puzzle ?



www.mathinenglish.com

puzzle 3

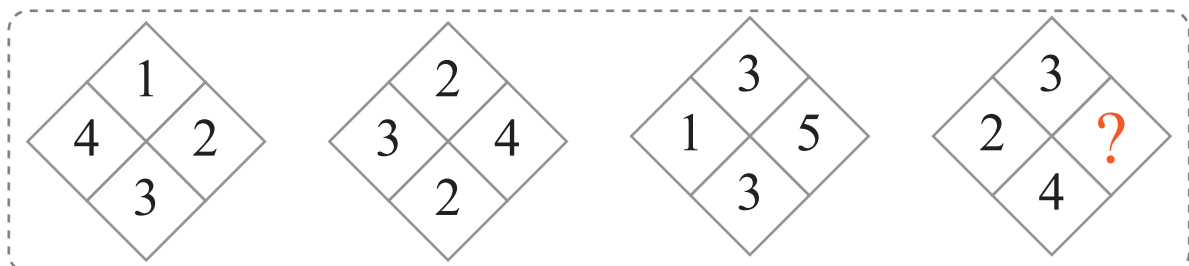
Which number completes the pattern ?



www.mathinenglish.com

puzzle 4

Which number completes the sequence ?



www.mathinenglish.com

Answer to brain teasers

puzzle 1 : 4

The cell in the right bottom in each circle is the average of the other 3 cells in the circle.

puzzle 2 : 18

Multiply the 1 digit number by 2 to get the opposite number.

puzzle 3 : 5

In each row add up the right and left hexagon and then subtract 1 to get the middle one.

puzzle 4 : 4

The sum of the numbers in the 1st diamond is 10, the 2nd 11, 3rd 12, and 4th diamond 13.