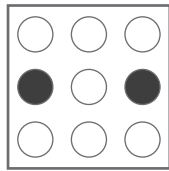
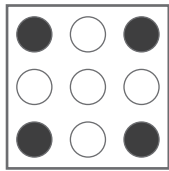
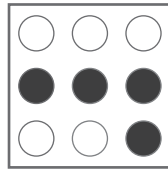
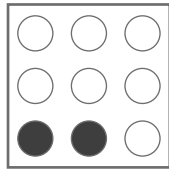
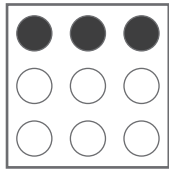


puzzle 1

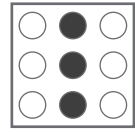
Which option is needed to complete this pattern ?



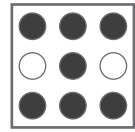
?

www.mathinenglish.com

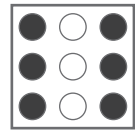
(A)



(B)



(C)



puzzle 2

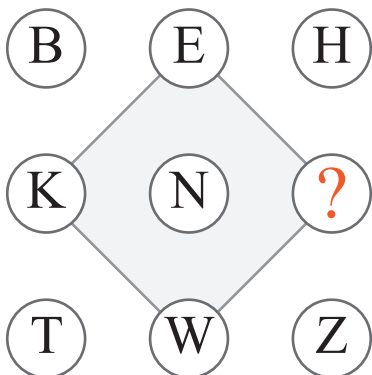
Which number completes the puzzle ?



www.mathinenglish.com

puzzle 3

What is the missing letter in the following letter sequence ?



www.mathinenglish.com

puzzle 4

Which number should replace the question mark ?

2	5	6
2	1	?
1	3	1
5	9	9

www.mathinenglish.com

Answer to brain teasers

puzzle 1 : A

The 3rd square in each row shows the dots that are not shaded in the first 2 squares together.

puzzle 2 : 45

The 1st and 2nd cell add up to the 3rd, the 2nd and 3rd to the 4th, 4th and 5th to the 6th and so on.

puzzle 3 : Q

Increasing pattern of +3 in letter values.

puzzle 4 : 2

The first 3 numbers in each column add up to the 4th number.