

puzzle 1

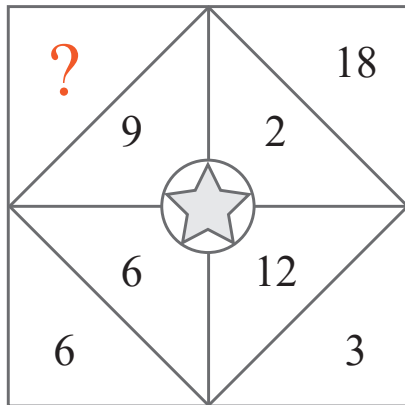
What is the missing time in this pattern ?



www.mathinenglish.com

puzzle 2

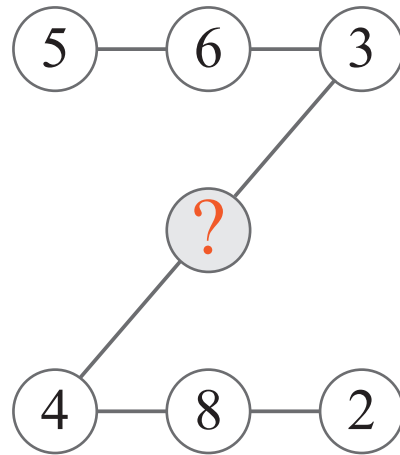
What is the missing number in the following pattern ?



www.mathinenglish.com

puzzle 3

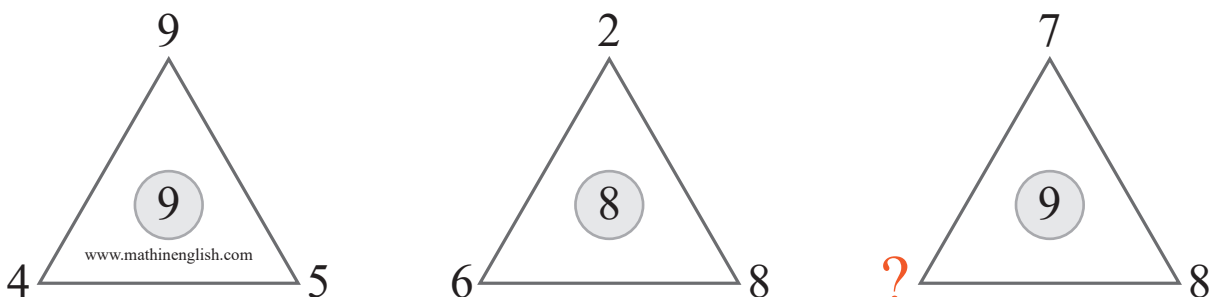
Which number is needed to complete the Z-pattern ?



www.mathinenglish.com

puzzle 4

Which number completes the puzzle ?



www.mathinenglish.com

Answer to brain teasers

puzzle 1 : 2:43

Each watch shows a time that is 16 minutes later than the one before.

puzzle 2 : 4

Each number pair multiplies to 36.

puzzle 3 : 7

Each row of numbers adds up to 14.

puzzle 4 : 3

The sum of the 3 numbers at the vertexes divided by 2.