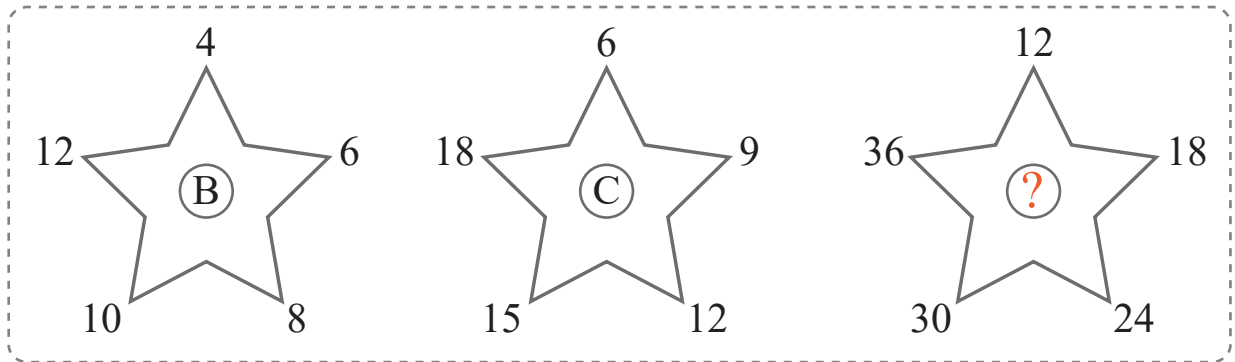


puzzle 1

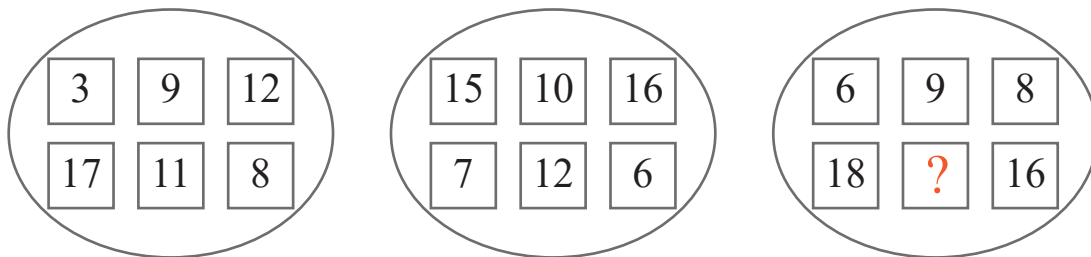
Which letter completes this pattern ?



www.mathinenglish.com

puzzle 2

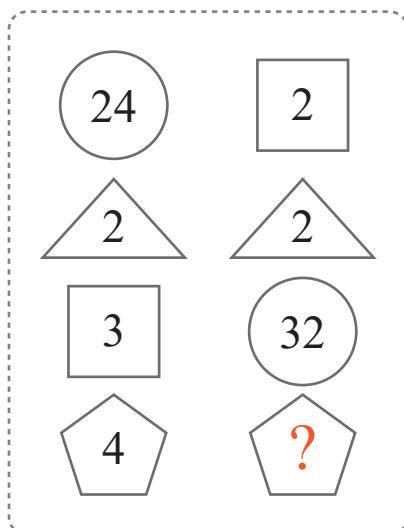
Which number completes this number sequence ?



www.mathinenglish.com

puzzle 3

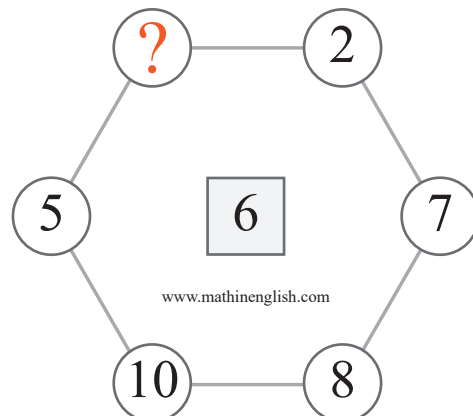
What is the missing number in the shape pattern ?



www.mathinenglish.com

puzzle 4

What is the missing number in this pattern ?



www.mathinenglish.com

## Answer to brain teasers

**puzzle 1 :** F

The numbers around the star are multiples of 6 (=F).

**puzzle 2 :** 15

The sum of the vertical pairs in the 3rd oval is 24.

**puzzle 3 :** 8

The 1 digit numbers in each column multiply to the number in the circle.

**puzzle 4 :** 4

The average of the opposite number pairs is 6.