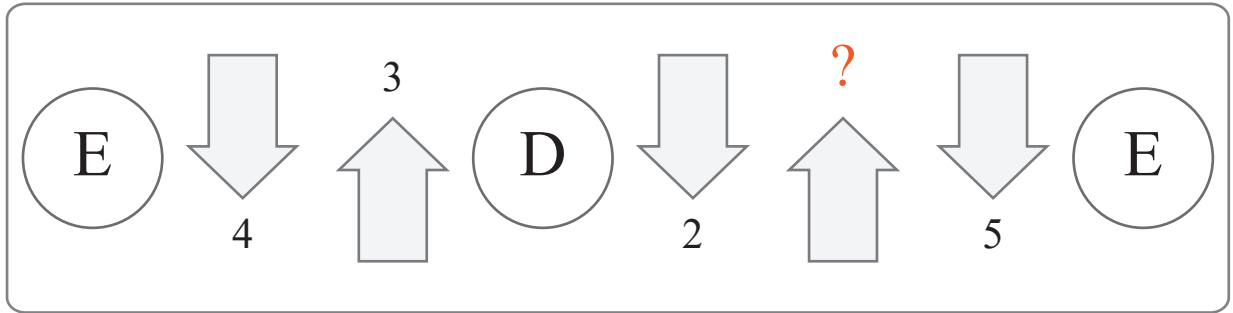


puzzle 1

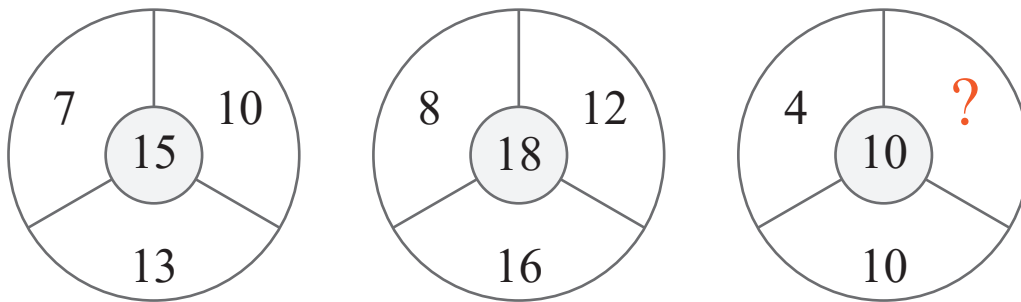
What number is needed to complete the flow chart.



www.mathinenglish.com

puzzle 2

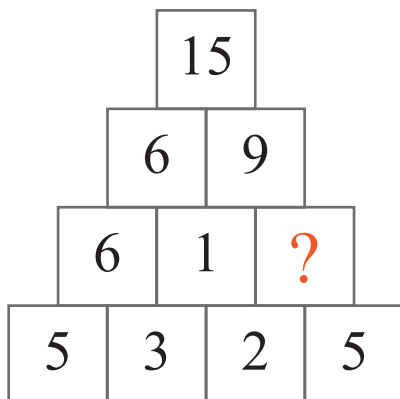
Which number completes the puzzle ?



www.mathinenglish.com

puzzle 3

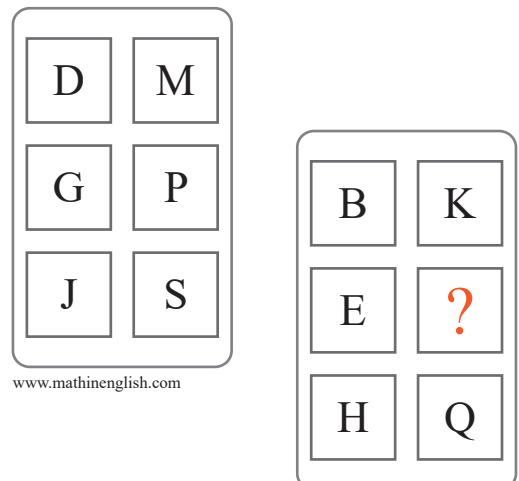
What is the missing number in the number pyramid ?



www.mathinenglish.com

puzzle 4

Which letter should replace the question mark ?



www.mathinenglish.com

Answer to brain teasers

puzzle 1 : 8

8 is needed to make the equation correct.

puzzle 2 : 6

The center number is the sum of the 3 numbers divided by 2.

puzzle 3 : 8

Each row in the pyramid add up to 15.

puzzle 4 : N

Each column follows a +3 letter value pattern.