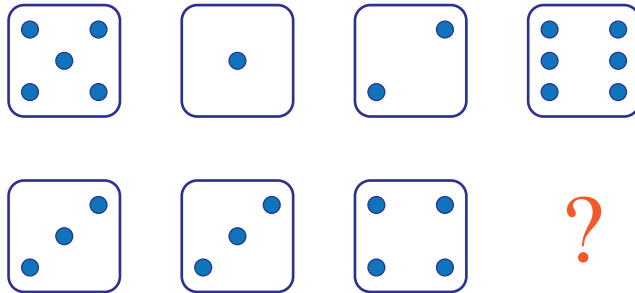


puzzle 1

What is the next dice in the pattern ?

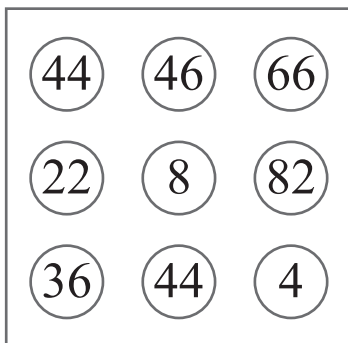


www.mathinenglish.com

- (A)
- (B)
- (C)

puzzle 2


What is the odd number out?



www.mathinenglish.com

puzzle 3

Which number completes the pattern ?



www.mathinenglish.com

puzzle 4

What letter completes the sequence ?



www.mathinenglish.com

## Answer to brain teasers

**puzzle 1 :** B

The difference between the dice in the top row and those in the bottom row is 2.

**puzzle 2 :** 36

36 is the only number with an odd digit in it.

**puzzle 3 :** 7

In each row the left and right number multiply to the 2 in the middle.

**puzzle 4 :** H

The sequence follows a +2 and minus 1 letter value pattern.