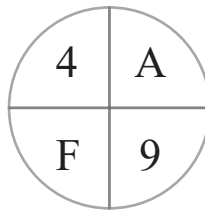
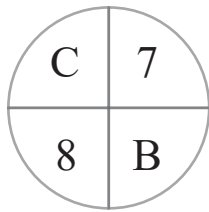
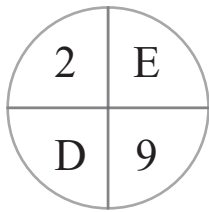
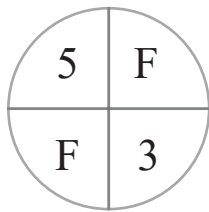
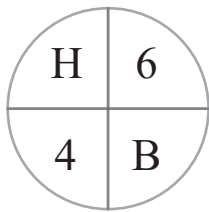


puzzle 1

Which option completes this pattern ?

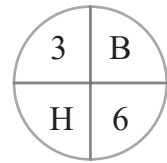


www.mathinenglish.com

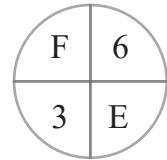


?

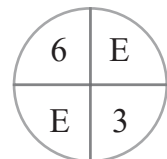
A



B




C



puzzle 2

Which number replaces the question mark ?



www.mathinenglish.com

puzzle 3

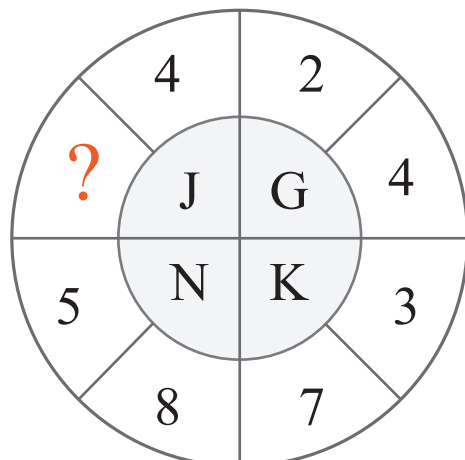
What is the missing number in the following pattern ?



www.mathinenglish.com

puzzle 4

What is the missing number in this pattern ?



www.mathinenglish.com

Answer to brain teasers

puzzle 1 : B

The numbers and letters in each circle add up to 20.

puzzle 2 : 80

The sequence follows a divide by 2, times 4 pattern.

puzzle 3 : 40

In each row multiply the number on the left with the one on the right and then divide by 2.

puzzle 4 : 5

Add the 2 numbers in each part and add 1 to the sum to get the letter value.