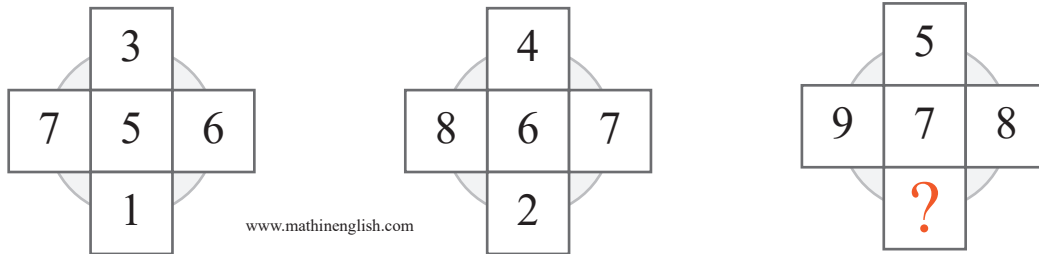


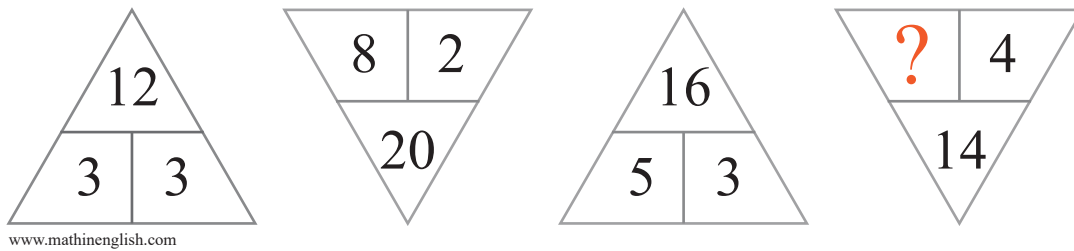
puzzle 1

Which number is needed to complete this puzzle ?



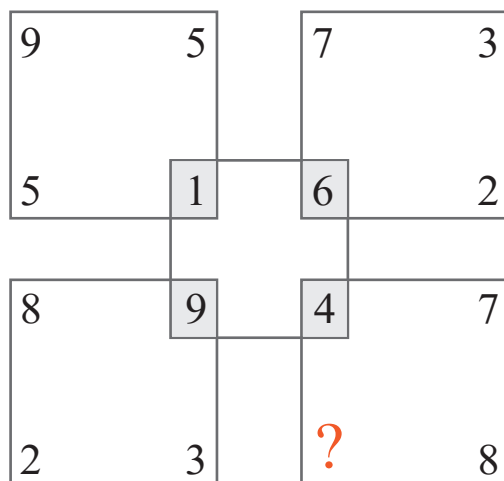
puzzle 2

Which number completes the puzzle ?




puzzle 3

What is the missing number in the following brain teaser ?



puzzle 4

What is the value of the square (natural number) ?



## Answer to brain teasers

**puzzle 1 :** 3

Add 1 to each cell in the 1st cross to get the 2nd. Do the same to the cells in the 2nd to get the 3rd cross.

**puzzle 2 :** 3

The sum of the 2 horizontally adjacent cells multiplied by 2 forms the value the 3rd cell..

**puzzle 3 :** 5

The sum of the opposite numbers in each square is equal.

**puzzle 4 :** 1

Star = 5, Square = 1, and circle = 2