
























puzzle 1

Which option completes this pattern ?

					(A) 
<small>www.mathinenglish.com</small>					(B) 
					(C) 

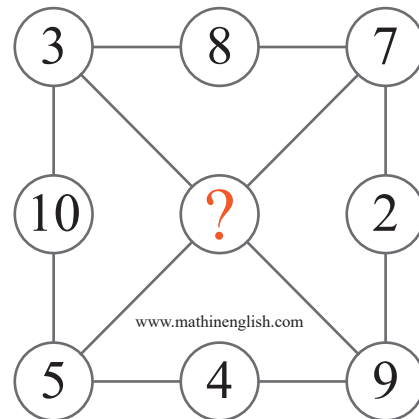
puzzle 2

What is the missing letter in the following pattern ?

		
		
<small>www.mathinenglish.com</small>		
		

puzzle 3

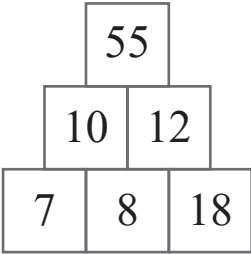
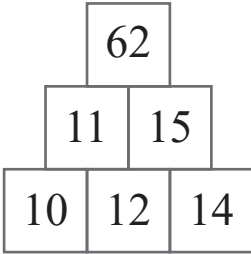
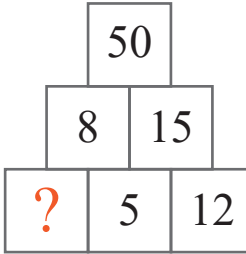
Which number is needed to complete the puzzle ?



www.mathinenglish.com

puzzle 4

Which 2-digit number replaces the question mark ?

		
<small>www.mathinenglish.com</small>		

## Answer to brain teasers

**puzzle 1 :** C

The 4 shapes change 1 place in each row and go up by +1.

**puzzle 2 :** D

Subtract the value of the 2nd cell from the 1st to get the 3rd.

**puzzle 3 :** 6

Each row or column adds up to 18.

**puzzle 4 :** 10

The first 2 rows in each pyramid add up to the top number.