

puzzle 1

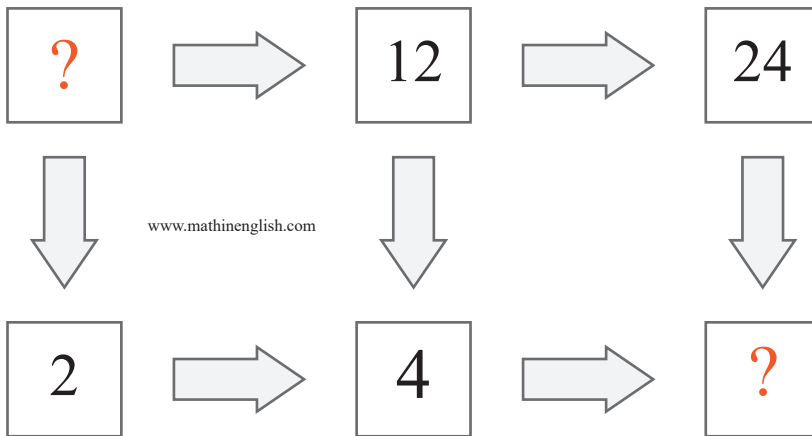
What is the time pattern here ?



www.mathinenglish.com

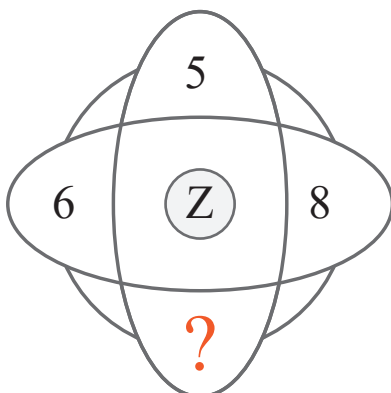
puzzle 2

Which 2 numbers are missing ?



puzzle 3


What is the missing number ?



www.mathinenglish.com

puzzle 4

What is the value of the question mark ?



www.mathinenglish.com

Answer to brain teasers

puzzle 1 : 1:55

The 3 digits 155 rotate 1 position in each next watch.

puzzle 2 : 6 and 8

Numbers multiply by 2 horizontally and divide by 3 vertically.

puzzle 3 : 7

All 4 numbers add up to 26, or Z.

puzzle 4 : 6

The left cross has a pattern of multiples of 2, the cross on the right multiples of 6.