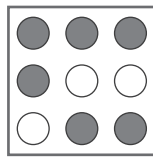
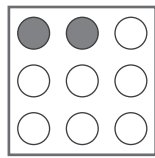
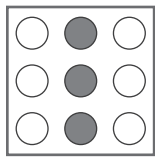
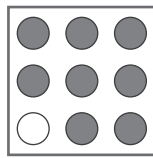
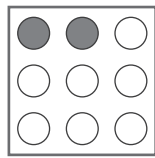
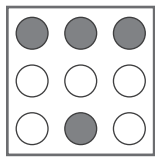
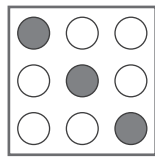
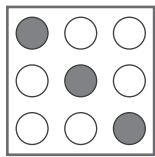


puzzle 1

Which option completes this pattern ?



www.mathinenglish.com




?

- (A)
- (B)
- (C)

puzzle 2


What is the missing letter in the following pattern ?



www.mathinenglish.com

puzzle 3

Which number is needed to complete the puzzle ?



www.mathinenglish.com

puzzle 4

Which 2 numbers replace the question marks ?

5	2	14
3	4	16
19	12	

www.mathinenglish.com

4	4	20
6	5	34
28	24	

2	8	?
7	4	?
18	36	

Answer to brain teasers

puzzle 1 : A

Multiply in each row the number of shaded dots of the 1st square with those of the 2nd to get the 3rd.

puzzle 2 : M

Each row and column follows a +1, +2, +3 pattern in values.

puzzle 3 : 6

The pattern is left times right, minus 10.

puzzle 4 : 20 and 32

Multiply the 2 digits in each row and columns and add a 4 to the product.