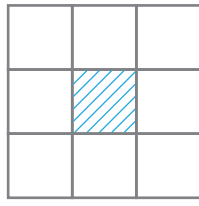
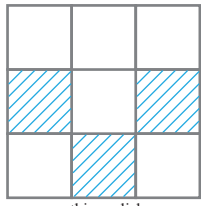
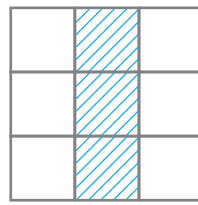
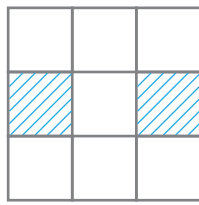
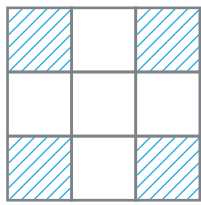
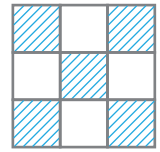


puzzle 1

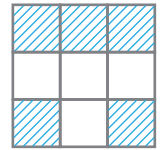
Which option is needed to complete this pattern ?



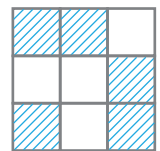
(A)



(B)



(C)



www.mathinenglish.com

puzzle 2

Which letter completes the puzzle ?

www.mathinenglish.com

puzzle 3

What is the missing number in this number puzzle ?

www.mathinenglish.com

puzzle 4

Which number should replace the question mark ?

81	6
36	9

16	49
7	4

www.mathinenglish.com

5	64
8	?

Answer to brain teasers

puzzle 1 : B

The shaded parts of the 3 squares in each row added together cover a complete square.

puzzle 2 : O

Multiply the letter value when the arrow points up and divide the value when the arrow is down.

puzzle 3 : 9

66 and 19 make 85.

puzzle 4 : 25

The opposite number pairs in each square are square roots and base numbers.