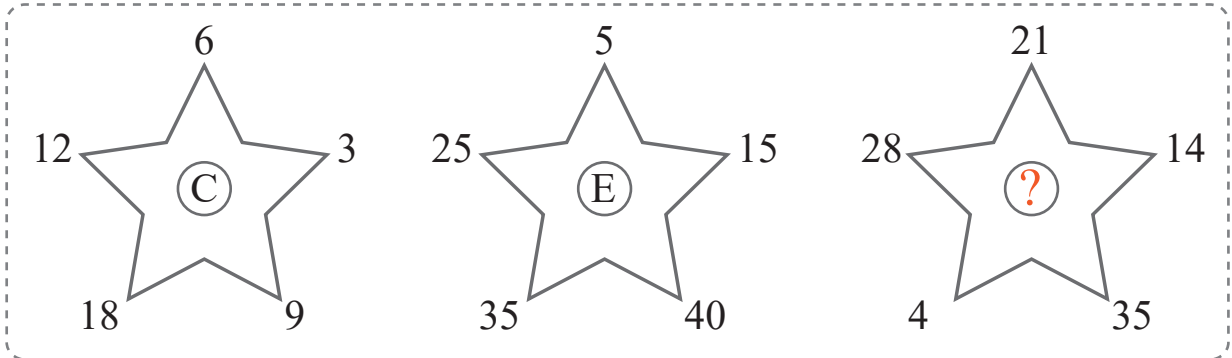


puzzle 1

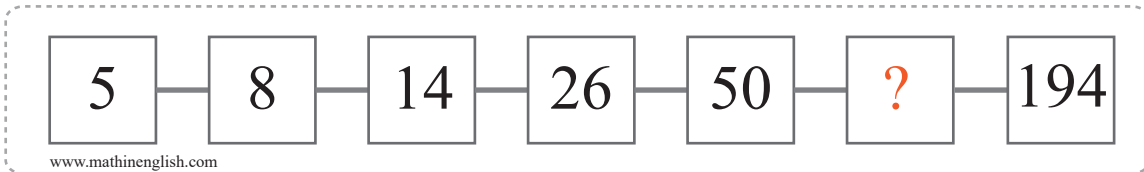
Which letter completes this pattern ?



www.mathinenglish.com

puzzle 2

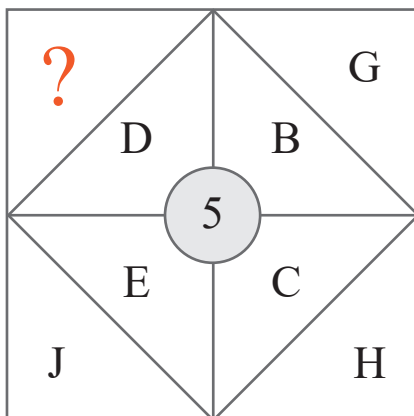
Which number completes this number sequence ?



www.mathinenglish.com

puzzle 3

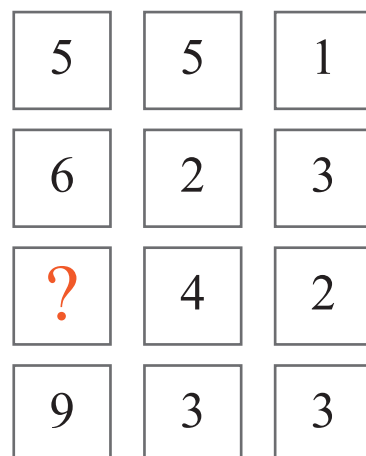
What is the missing letter in this brain teaser ?



www.mathinenglish.com

puzzle 4

What is the missing number in this pattern ?



www.mathinenglish.com

Answer to brain teasers

puzzle 1 : G

The numbers around the star are multiples of 7 (= G).

puzzle 2 : 98

The sequence follows a pattern of times 2, minus 2.

puzzle 3 : I

The difference in letter values of each corner pair is 5.

puzzle 4 : 8

Multiplying the 2nd and 3rd cell in each row equals the 1st cell.