


puzzle 1

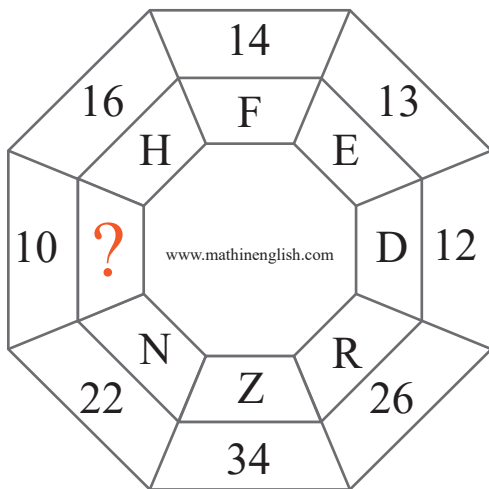
What is the next dice in the pattern ?



www.mathinenglish.com


puzzle 2

What is the missing letter in this puzzle ?




puzzle 3

Which number completes the pattern ?



puzzle 4

Which number completes this number sequence ?



www.mathinenglish.com

Answer to brain teasers

puzzle 1 : B

Each column of dice adds up to 10.

puzzle 2 : B

Each number is 8 more than the value of the connecting letter.

puzzle 3 : 10

The sum of 2 corner numbers divided by 3 gives the center number.

puzzle 4 : 57

The sequence follows a -3, +18 pattern.