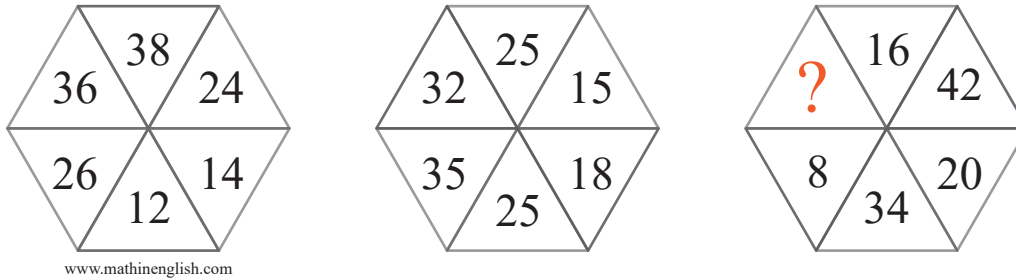


puzzle 1

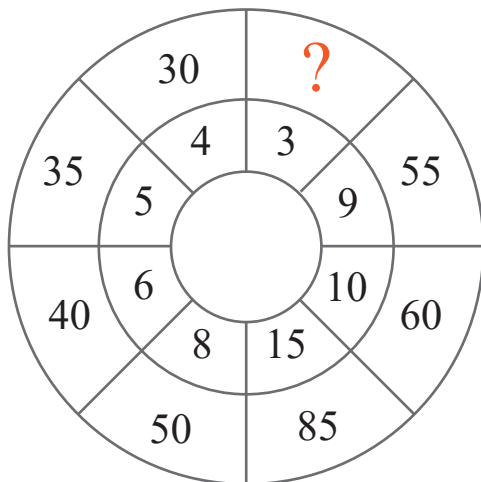
Which number completes this pattern ?



www.mathinenglish.com

puzzle 2

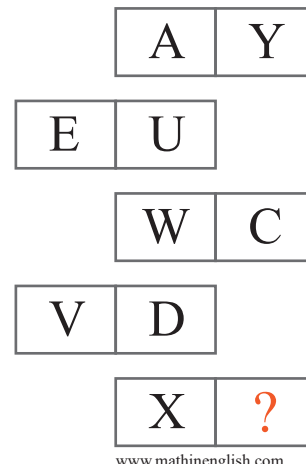
What is the missing number in the following pattern ?



www.mathinenglish.com

puzzle 3

Which letter is needed to complete the puzzle ?



www.mathinenglish.com

puzzle 4

Which 2 numbers are missing here ?

5	2	30
3	9	60
20	70	

www.mathinenglish.com

4	1	30
6	5	10
20	40	

2	8	?
7	4	?
50	40	

Answer to brain teasers

puzzle 1 : 30

The opposite numbers in each hexagon add up to 50.

puzzle 2 : 25

Multiply the inner numbers by 5 and add 10 to get the outer ones.

puzzle 3 : B

Each row adds up to a value of 26.

puzzle 4 : 60 and 30

The difference between the 2 cells in each row and column multiplied by 10.