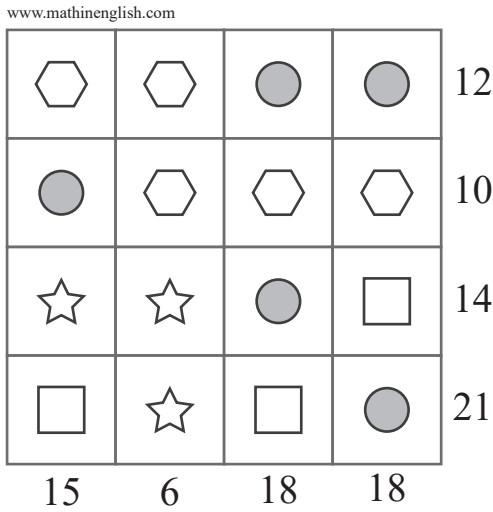


puzzle 1

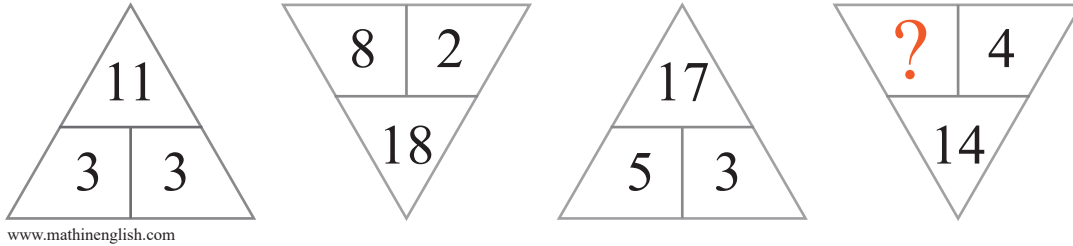
Which option is the correct one ?



- (A) > 3
- (B) > 5
- (C) < 2

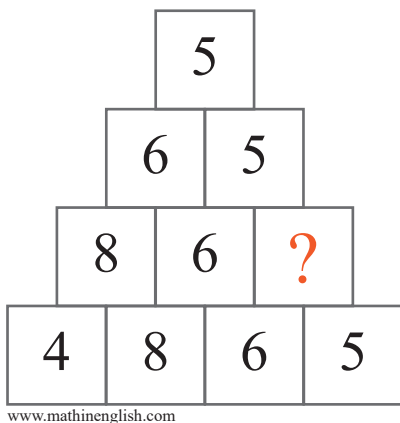
puzzle 2

Which number completes the puzzle ?



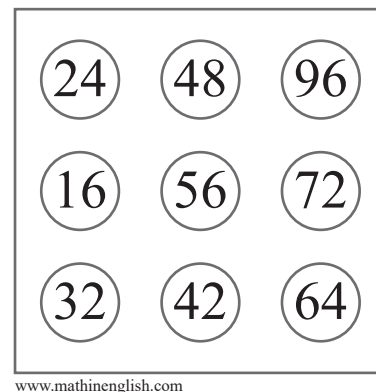
puzzle 3

What is the missing number in the following pyramid ?



puzzle 4

Which number is the odd one out ?



Answer to brain teasers

puzzle 1 : C

The circle is 4, hexagon 2, square 8 and star 1.

puzzle 2 : 3

In each triangle, multiply the adjacent cells and add 2.

puzzle 3 : 5

Only the last digits of a lower row are in a higher row.

puzzle 4 : 42

42 is not a multiple of 8.