


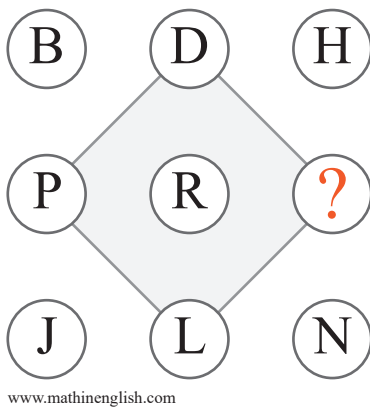
puzzle 1

Which option would come next in this pattern ?




puzzle 2

What is the missing letter in the following pattern ?



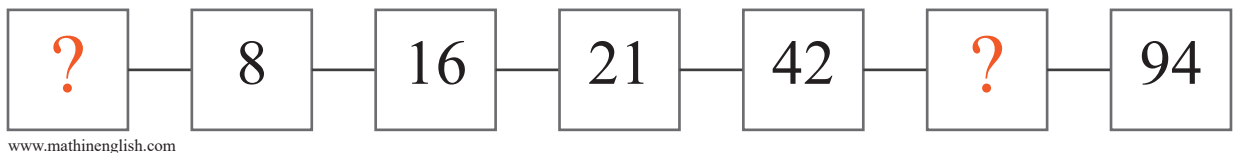
puzzle 3

Which number is needed to complete the puzzle ?



puzzle 4

Which 2 numbers replaces the question mark ?



## Answer to brain teasers

**puzzle 1 :** B

The sequence follows an intersecting and not intersecting, and a shaded and not shaded pattern.

**puzzle 2 :** F

The sequence contains the multiples of 2 up to 18 in letter values.

**puzzle 3 :** 9

Add the center number to 2 times a adjacent cell to get the 3rd number on the outside.

**puzzle 4 :** 3 and 47

The sequence follows a +5,  $\times 2$  pattern.