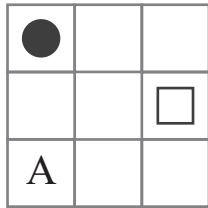
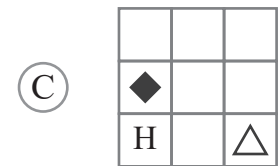
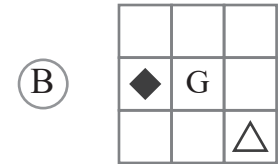
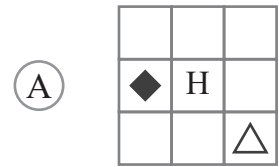
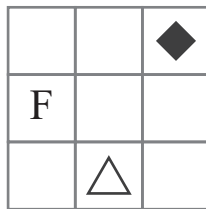
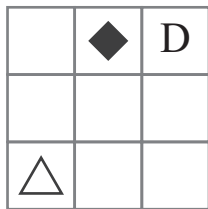
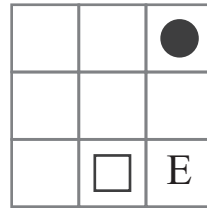
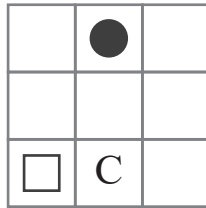


puzzle 1

Which option completes this pattern ?




www.mathinenglish.com



puzzle 2

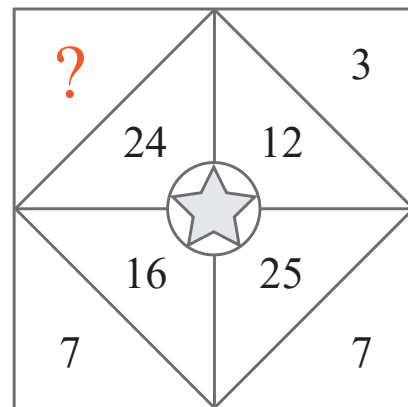
Which number is missing here?



www.mathinenglish.com

puzzle 3

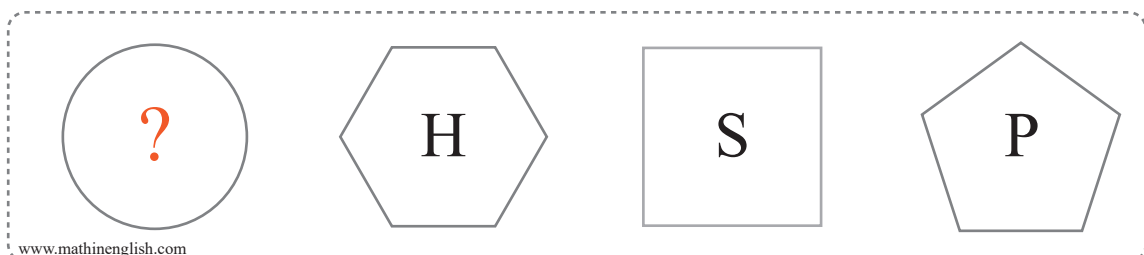
Which 1 digit number completes the pattern ?



www.mathinenglish.com

puzzle 4

What letter completes the sequence ?



www.mathinenglish.com

## Answer to brain teasers

**puzzle 1 :** A

All shapes and letters move 1 place in the next square. The letters also follow a +2 pattern.

**puzzle 2 :** 6

16, the middle cells, is half of the corner digits 3 and 2 (32).

**puzzle 3 :** 6

In each part, the 2 digits of the inner number add up to the 1 digit number.

**puzzle 4 :** C

C of circle, S of square and so on.