

puzzle 1

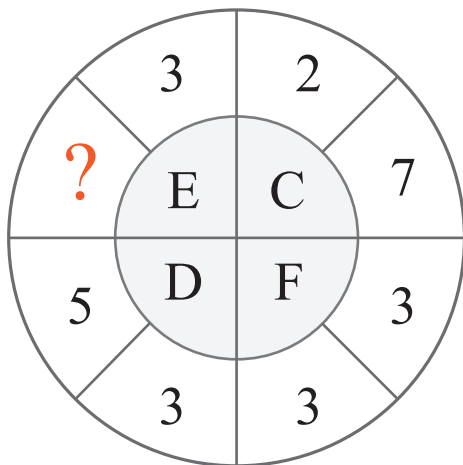
What time is missing in this sequence ?



www.mathinenglish.com

puzzle 2

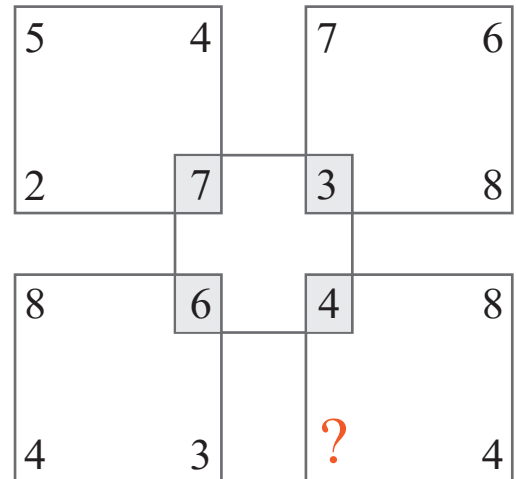
Which number completes this sequence ?



www.mathinenglish.com

puzzle 3

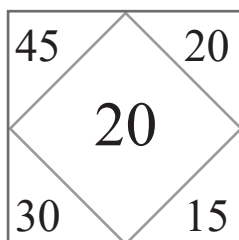
Which number is missing ?



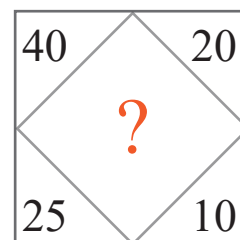
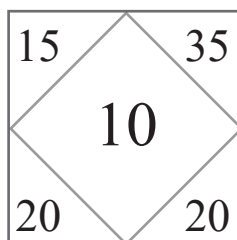
www.mathinenglish.com

puzzle 4

Which number completes the sequence ?



www.mathinenglish.com



Answer to brain teasers

puzzle 1 : 5:34

Add the time of the 1st and 2nd to get the time on the 3rd. Add 2nd and 3rd to get the time of the 4th watch, and so on.

puzzle 2 : 4

Each part in the circle adds up to 12.

puzzle 3 : 2

The digits of the bottom numbers together in each square are half that of the top digits together.

puzzle 4 : 25

The difference between the sum of the top numbers and the sum of the bottom numbers in each square.