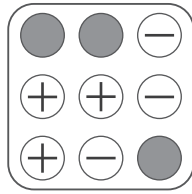
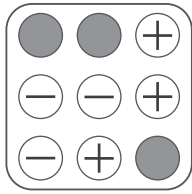
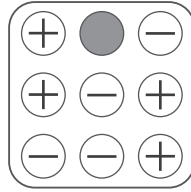
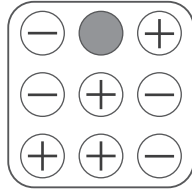
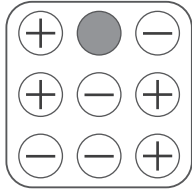
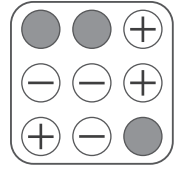


puzzle 1

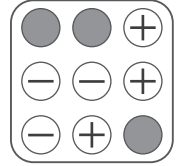
Which option is needed to complete this pattern ?



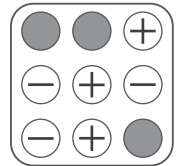
(A)



(B)



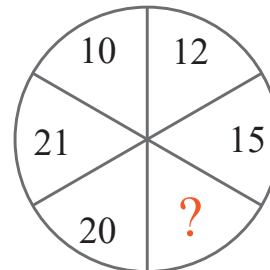
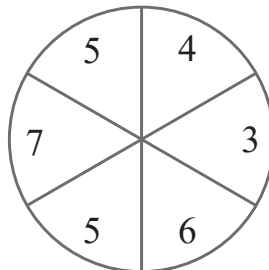
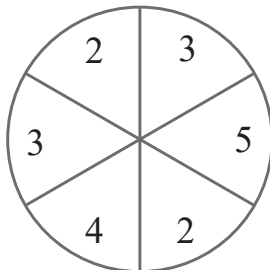
(C)



www.mathinenglish.com

puzzle 2

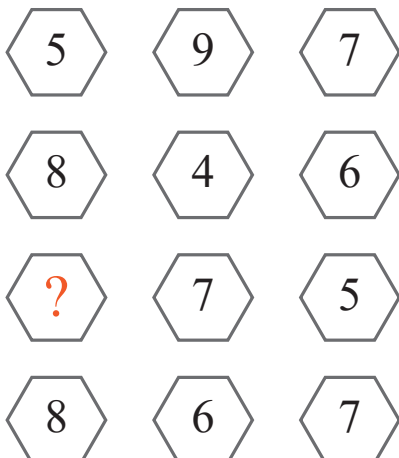
Which number completes this sequence ?



www.mathinenglish.com

puzzle 3

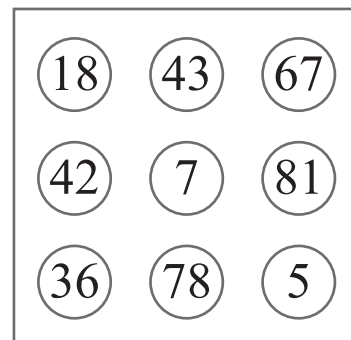
What is the missing number in this pattern ?



www.mathinenglish.com

puzzle 4

Which number is the odd one out ?



www.mathinenglish.com

Answer to brain teasers

puzzle 1 : B

For each row, the plus symbol changes in a minus in the next square.

puzzle 2 : 12

The numbers in the 2 circles in the same position multiplied, give the number in the 3rd.

puzzle 3 : 3

Add the first 2 cells in each row and divide the sum by 2 to get the 3rd cell.

puzzle 4 : 42

42 is the only number that is only made up off even numbers.