


puzzle 1

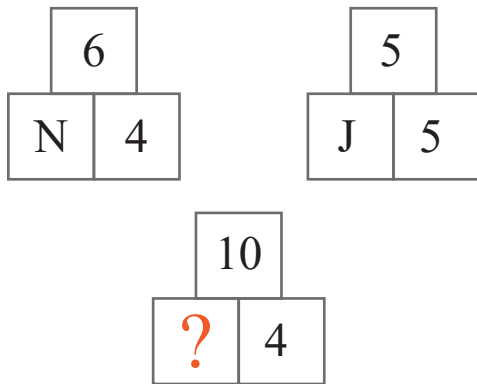
Which dice completes this domino pattern ?



www.mathinenglish.com

puzzle 2

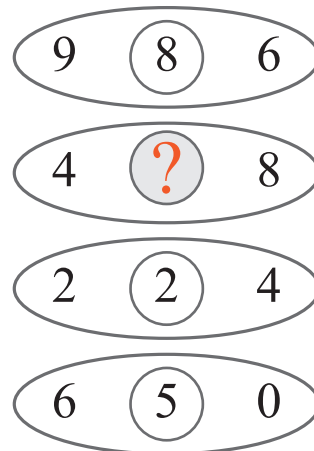
What is the missing letter in this puzzle ?



www.mathinenglish.com

puzzle 3


Which number completes the pattern ?



www.mathinenglish.com

puzzle 4

What number completes the sequence ?



www.mathinenglish.com

Answer to brain teasers

puzzle 1 : C

Each row of dice multiplies to 72.

puzzle 2 : Z

Divide the sum of the lower row by 3 to get the top number.

puzzle 3 : 4

The right and left digit put together and divided by 12.

puzzle 4 : 6

Subtract the numbers of the left from the right circle to get the numbers in the middle circle.