


puzzle 1

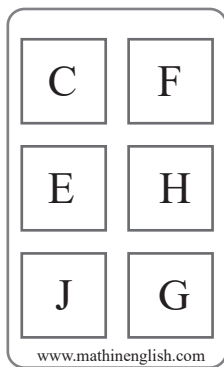
What are the missing pips in the domino ?




www.mathinenglish.com

puzzle 2

What is the missing number in this puzzle ?




www.mathinenglish.com



puzzle 3

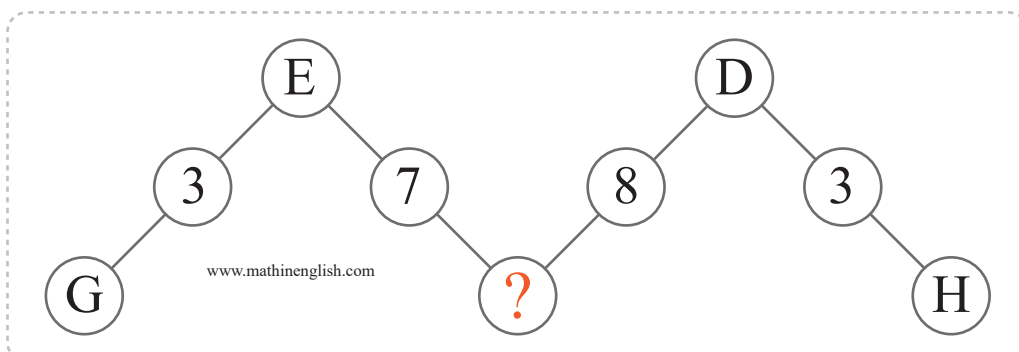
Which number completes the pattern ?



www.mathinenglish.com

puzzle 4

Which letter is missing here ?



www.mathinenglish.com

## Answer to brain teasers

**puzzle 1 :** 6

All dominoes are odd numbers from 1 to 11.

**puzzle 2 :** 0

Multiply the 2 letters to get the 2 digits in the same row.  $E \times H$   
= 4 and 0.

**puzzle 3 :** 5

Each shape contains 4 2-digit numbers and their sum is 100.

**puzzle 4 :** C

Each 2 letters and number in the middle add up to 15.