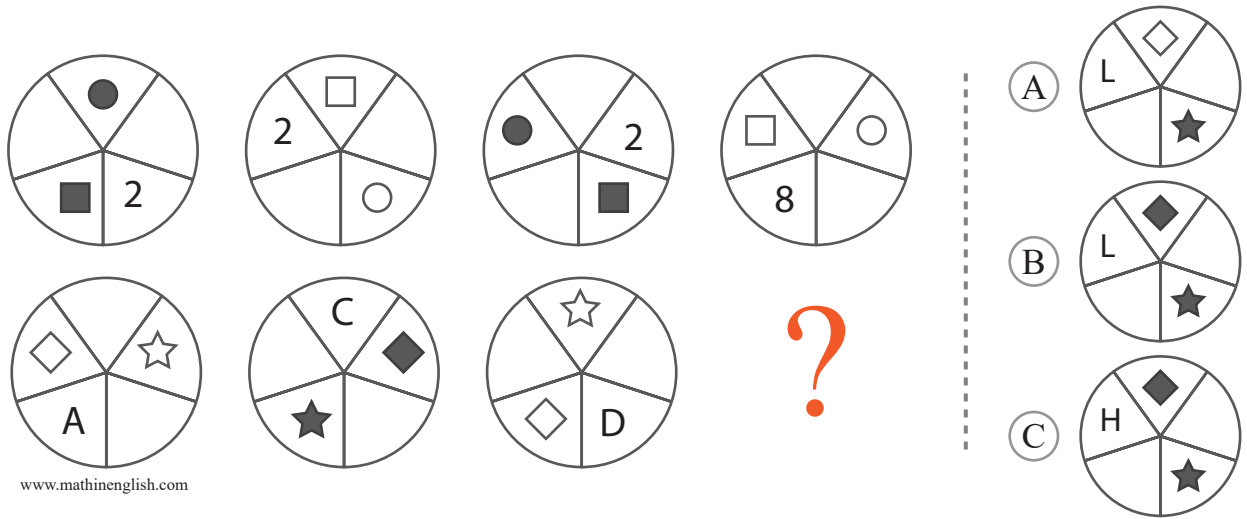


puzzle 1

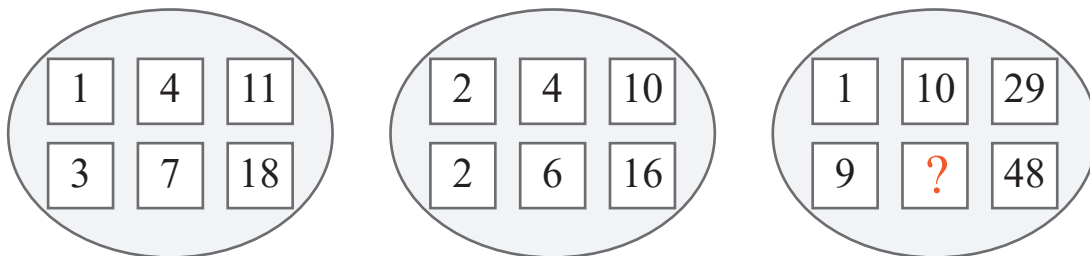
Which option is needed to complete this pattern ?



www.mathinenglish.com

puzzle 2

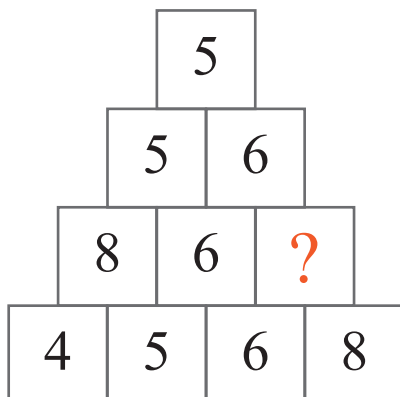
Which number completes this number sequence ?



www.mathinenglish.com

puzzle 3

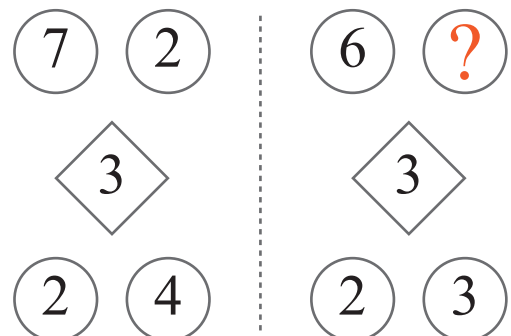
What is the missing number in the shape pattern ?



www.mathinenglish.com

puzzle 4

What is the missing number in this pattern ?



www.mathinenglish.com

Answer to brain teasers

puzzle 1 : B

The symbols move 2 steps in the next circle. Shapes alternate in shaded and non shaded and the numbers/letters of the 1st 3 circles multiplied form the one in the 4th.

puzzle 2 : 19

Going top-down, add each number to the one before to get the next one.

puzzle 3 : 5

Starting from the top, each lower row contains the same digits as the one above it.

puzzle 4 : 9

The top 2 digits divided by the diamond are equal to the digits at the bottom.