

puzzle 1

Which option completes this pattern ?

$$\bigcirc \times \bigcirc \times \bigcirc = \square$$

$$\bigcirc + \square + \hexagon = 14$$

$$\hexagon \div \bigcirc = 2$$

$$\triangle - \hexagon = 1$$

www.mathinenglish.com

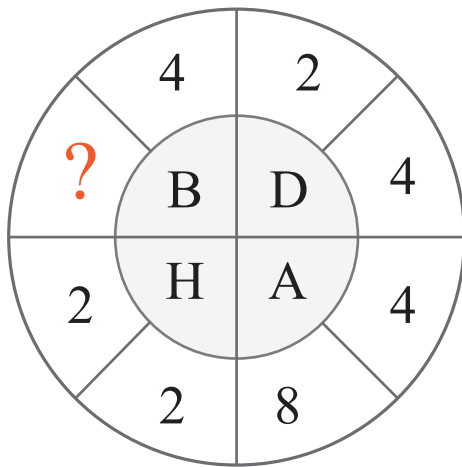
(A) $\bigcirc = 3$

(B) $\triangle > 4$

(C) $\hexagon < 3$

puzzle 2

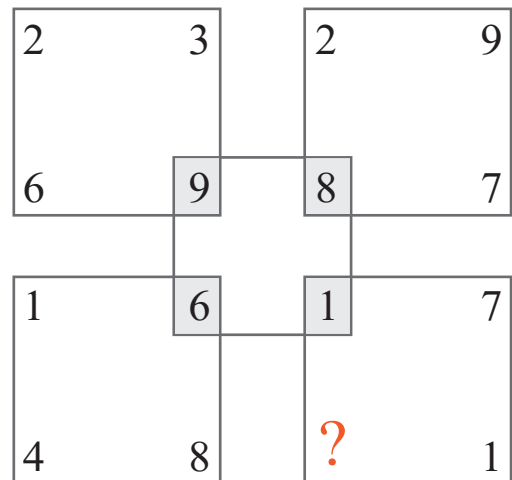
What is the missing number in the following pattern ?



www.mathinenglish.com

puzzle 3

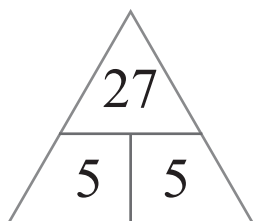
Which number is needed to complete the puzzle ?



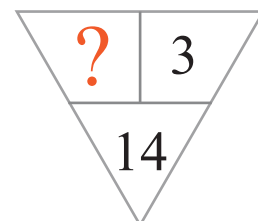
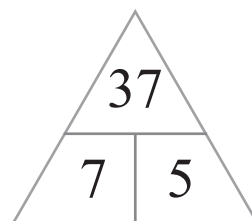
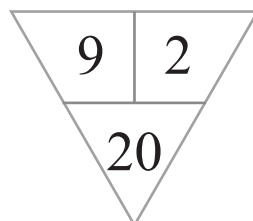
www.mathinenglish.com

puzzle 4

Which number is missing here ?



www.mathinenglish.com



Answer to brain teasers

puzzle 1 : B

Circle = 2, square = 8, hexagon = 4, triangle = 5.

puzzle 2 : 4

Multiplying the 2 numbers and the letter in each circle part equals 32.

puzzle 3 : 5

Multiply the number formed by the top 2 digits in each square by 3 to get the bottom 2 digits.

puzzle 4 : 4

Multiply the 2 connecting numbers in each triangle and add 2 to the result.