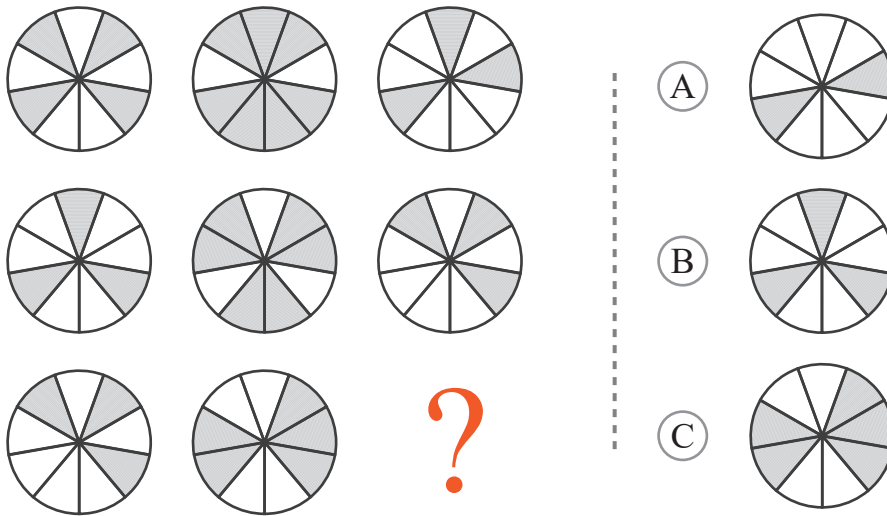


puzzle 1

Which option completes this pattern ?



www.mathinenglish.com

puzzle 2


Which letter completes this sequence ?



www.mathinenglish.com

puzzle 3


Which number is the odd one out ?



www.mathinenglish.com

puzzle 4

What is the missing number in this pattern ?



www.mathinenglish.com

Answer to brain teasers

puzzle 1 : A

In each row, the middle circle show the sum of shaded parts of the 1st and 3rd circle.

puzzle 2 : S

Starting with the M of Monday, the pattern ends with S of Sunday.

puzzle 3 : 13

13 is not a prime number.

puzzle 4 : 30

The 4 numbers on the outside, the 4 numbers in the 4 middle, and the center number add up to 90.