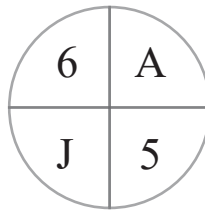
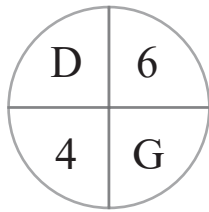
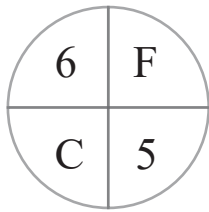
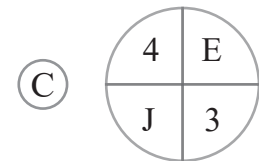
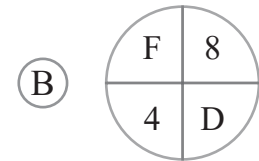
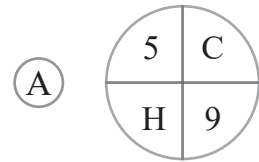
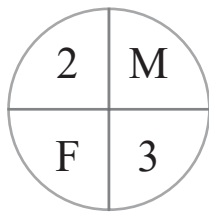
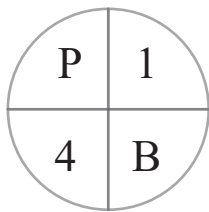


puzzle 1

Which option completes this pattern ?

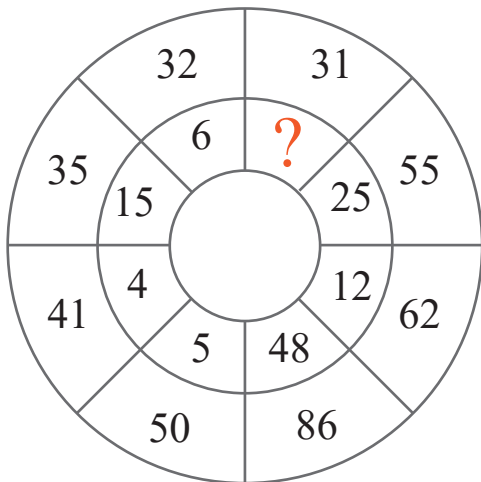


www.mathinenglish.com



puzzle 2

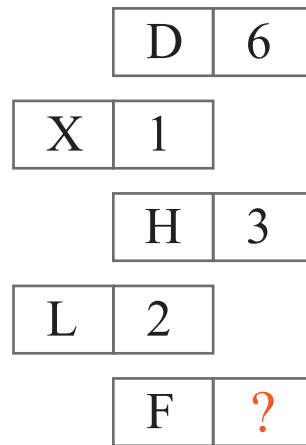
What is the missing number in this puzzle ?



www.mathinenglish.com

puzzle 3

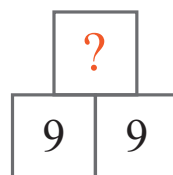
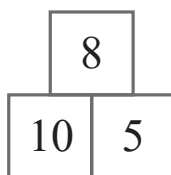
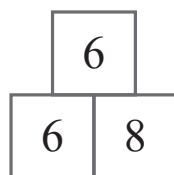
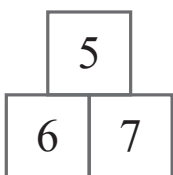
Which number completes the pattern ?



www.mathinenglish.com

puzzle 4

Which number completes this number sequence ?



www.mathinenglish.com

## Answer to brain teasers

**puzzle 1 :** A

The circles follow a +1 sequence, starting with 20 in the 1st circle and 25 is the missing circle.

**puzzle 2 :** 3

Multiply the digits of the numbers to get the inner circle.

**puzzle 3 :** 4

The product of each row is 24.

**puzzle 4 :** 9

The pyramids follow a +2, +3 and +4 pattern starting with a sum of 18 in the 1st.