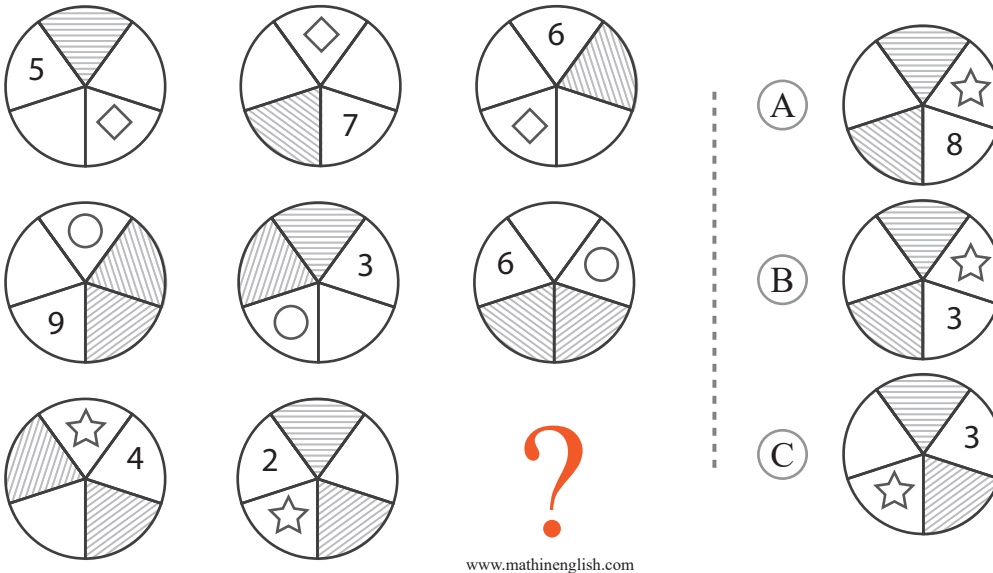


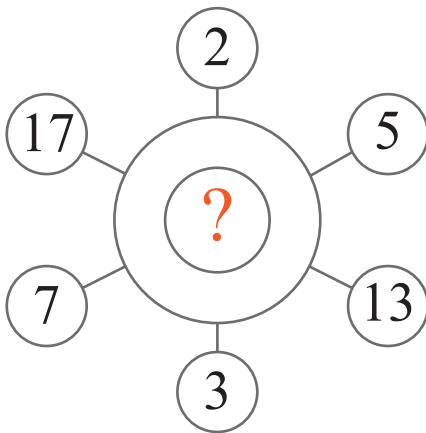
puzzle 1

Which option completes the shape pattern ?



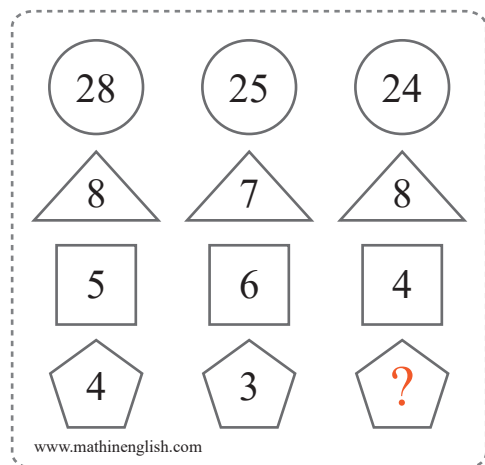
puzzle 2

Which number completes this sequence ?




puzzle 3

Which number is missing ?



puzzle 4

Which number completes the sequence ?



## Answer to brain teasers

**puzzle 1 :** B

The shaded parts and symbols rotate 3 steps in each next circle.

The number in the middle circle is the average of the other 2 in the row.

**puzzle 2 :** 11

All prime numbers up to 17.

**puzzle 3 :** 4

In each column, multiply the lowest 2 numbers and add the 3rd to get the top number.

**puzzle 4 :** 6

The sequence follows a sum of digits and +15 pattern. The 2nd cell is  $1+5$ , and the 3rd cell is  $15 + 15$ .